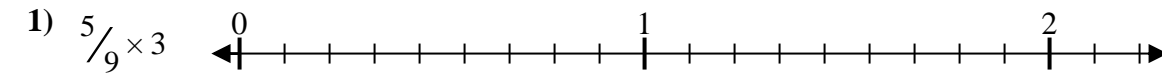


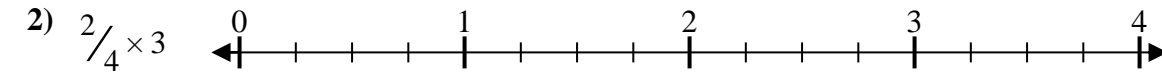


Solve each problem.

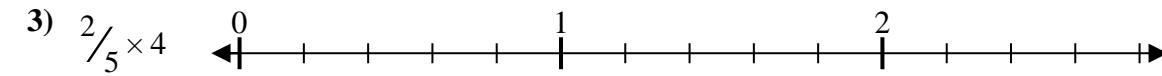
**Answers**



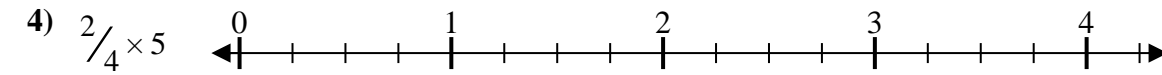
1. \_\_\_\_\_




2. \_\_\_\_\_



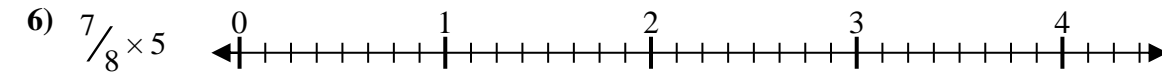
3. \_\_\_\_\_



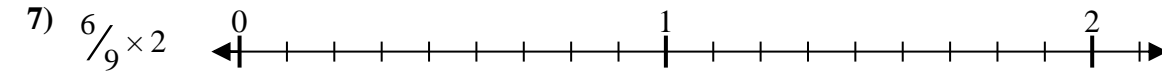
4. \_\_\_\_\_



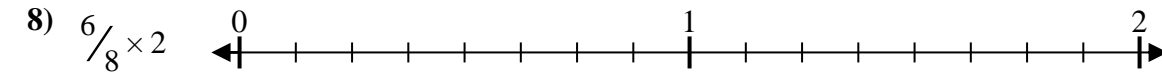
5. \_\_\_\_\_



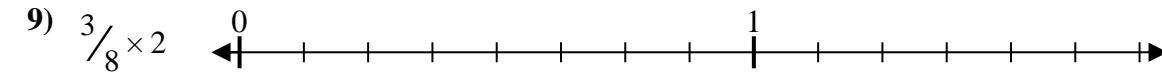
6. \_\_\_\_\_



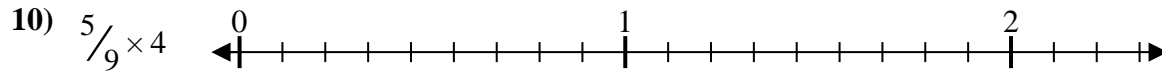
7. \_\_\_\_\_



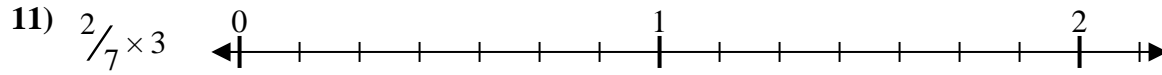
8. \_\_\_\_\_



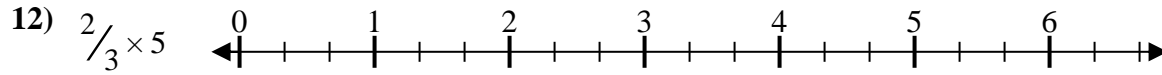
9. \_\_\_\_\_



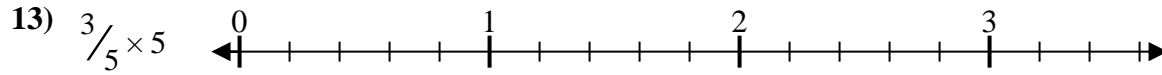
10. \_\_\_\_\_



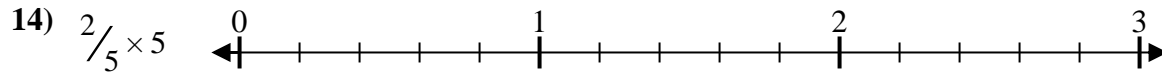
11. \_\_\_\_\_



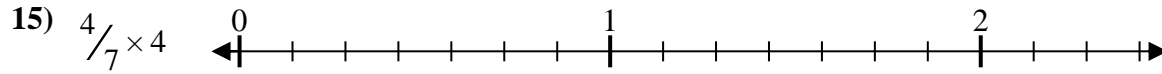
12. \_\_\_\_\_



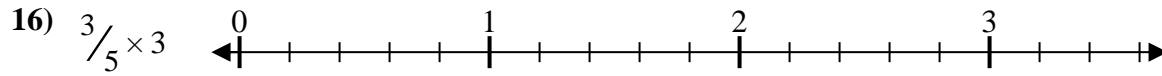
13. \_\_\_\_\_




14. \_\_\_\_\_



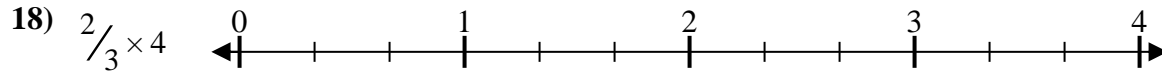
15. \_\_\_\_\_



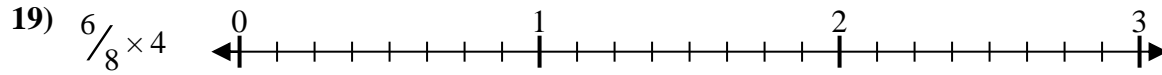
16. \_\_\_\_\_



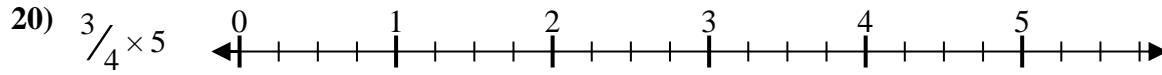
17. \_\_\_\_\_



18. \_\_\_\_\_



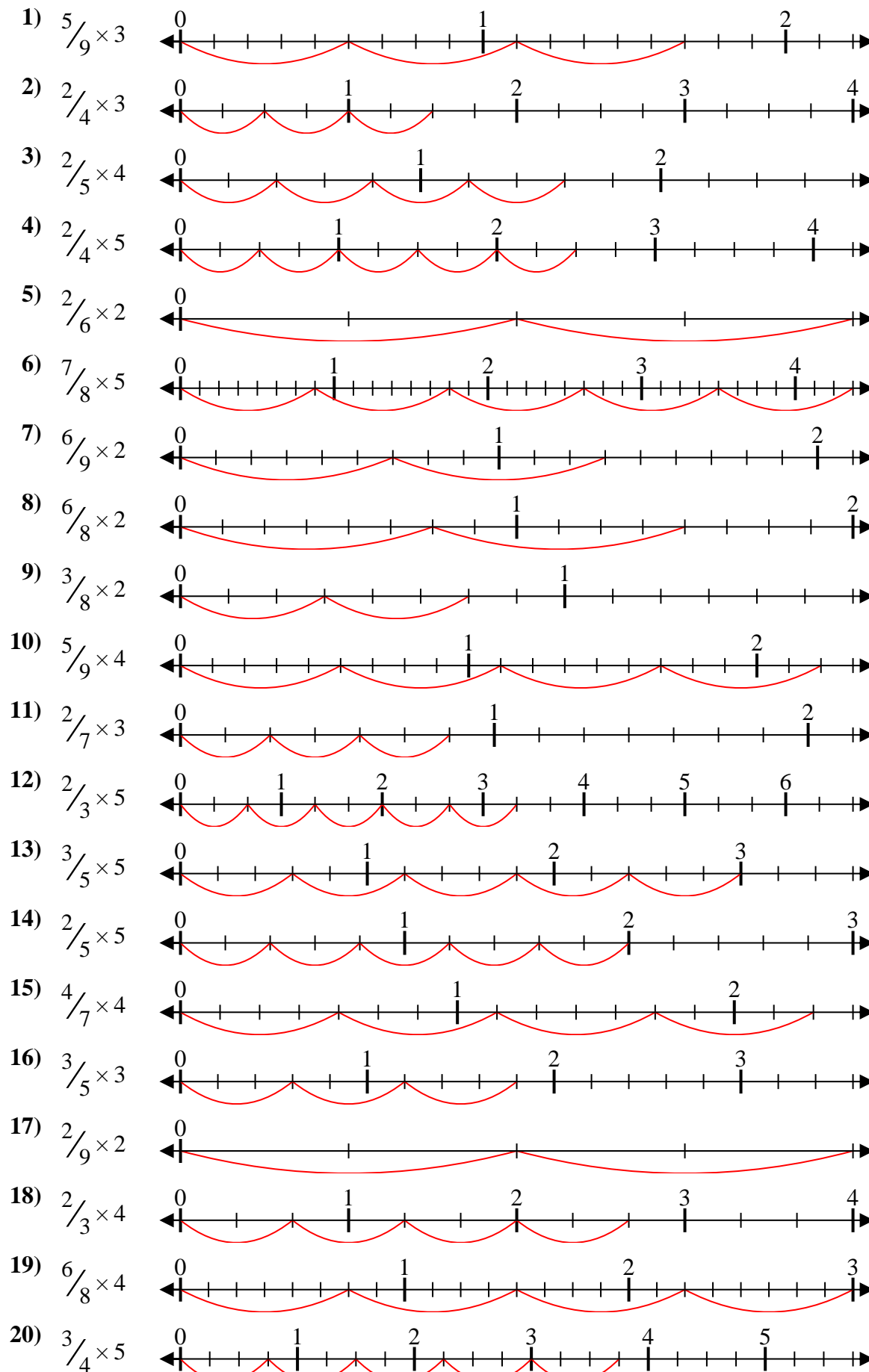
19. \_\_\_\_\_



20. \_\_\_\_\_



Solve each problem.



**Answers**

1.  $\frac{15}{9} = 1\frac{2}{3}$
2.  $\frac{6}{4} = 1\frac{1}{2}$
3.  $\frac{8}{5} = 1\frac{3}{5}$
4.  $\frac{10}{4} = 2\frac{1}{2}$
5.  $\frac{4}{6} = \frac{2}{3}$
6.  $\frac{35}{8} = 4\frac{3}{8}$
7.  $\frac{12}{9} = 1\frac{1}{3}$
8.  $\frac{12}{8} = 1\frac{1}{2}$
9.  $\frac{6}{8} = \frac{3}{4}$
10.  $\frac{20}{9} = 2\frac{2}{9}$
11.  $\frac{6}{7} = \frac{6}{7}$
12.  $\frac{10}{3} = 3\frac{1}{3}$
13.  $\frac{15}{5} = 3$
14.  $\frac{10}{5} = 2$
15.  $\frac{16}{7} = 2\frac{2}{7}$
16.  $\frac{9}{5} = 1\frac{4}{5}$
17.  $\frac{4}{9} = \frac{4}{9}$
18.  $\frac{8}{3} = 2\frac{2}{3}$
19.  $\frac{24}{8} = 3$
20.  $\frac{15}{4} = 3\frac{3}{4}$